

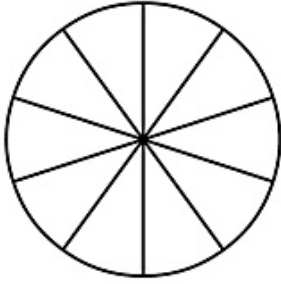
مُجمَع الرياضيات

الكسور في دوائر

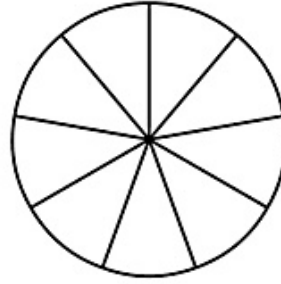
الصف : _____

اسم الطالب : _____

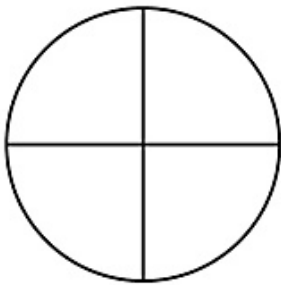
لون الكسر في الدائرة بحسب الكسر المسجل بجانبها



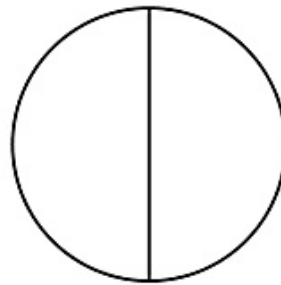
$$\frac{8}{10}$$



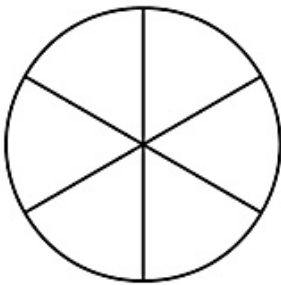
$$\frac{2}{9}$$



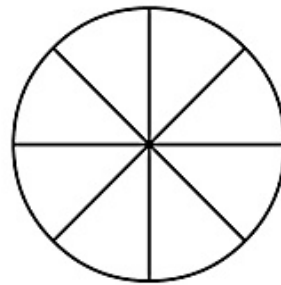
$$\frac{1}{4}$$



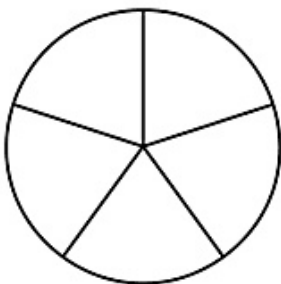
$$\frac{1}{2}$$



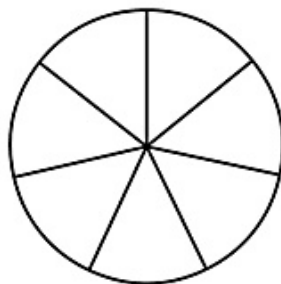
$$\frac{1}{6}$$



$$\frac{3}{8}$$



$$\frac{2}{5}$$



$$\frac{7}{7}$$

طباعة