

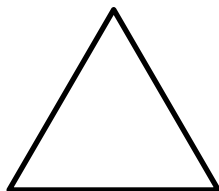
Types of Triangles

Name : _____

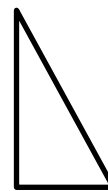
Date: _____

Identify if the triangle is scalene, isosceles or equilateral


1.




2.



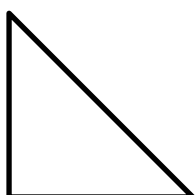
3.




4.




5.



6.



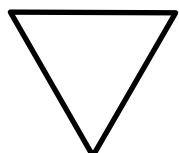
7.



8.



9.



10.