

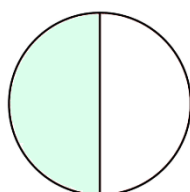


שברים בצורות

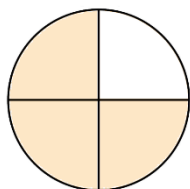
כיתה: _____

שם מלא: _____

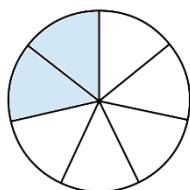
חברו בין כל שבר והצורה המתאימה לו :



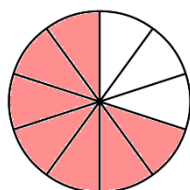
$$\frac{1}{3}$$



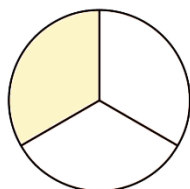
$$\frac{3}{6}$$



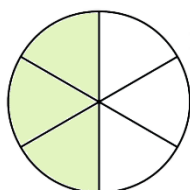
$$\frac{1}{2}$$



$$\frac{2}{7}$$



$$\frac{3}{4}$$



$$\frac{7}{10}$$