

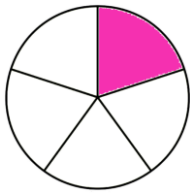


שברים בצורות

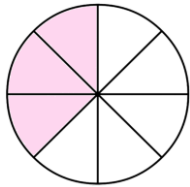
כיתה: _____

שם מלא: _____

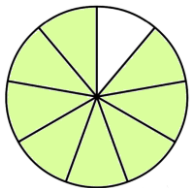
חברו בין כל שבר והצורה המתאימה לו :



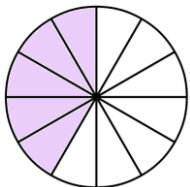
$$\frac{3}{8}$$



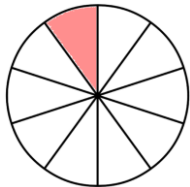
$$\frac{2}{3}$$



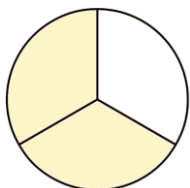
$$\frac{1}{10}$$



$$\frac{1}{5}$$



$$\frac{5}{12}$$



$$\frac{8}{9}$$